

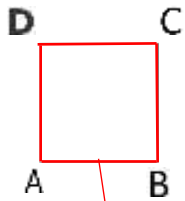
## MATEMATIKA, ponedeljek – 11. 5.

➤ Zapis v zvezek:

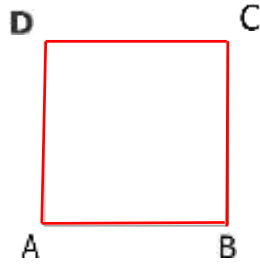
### OBSEG KVADRATA

Nariši kvadrate in z rdečo barvo označi obseg!

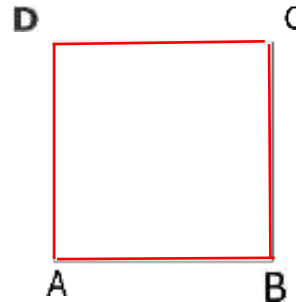
$a = 2 \text{ cm}$



$a = 5 \text{ cm}$

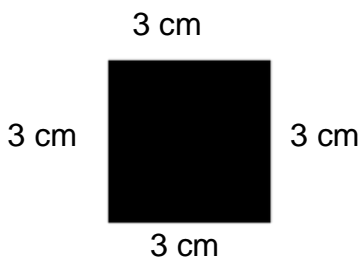


$a = 6 \text{ cm}$



**OBSEG KVADRATA**

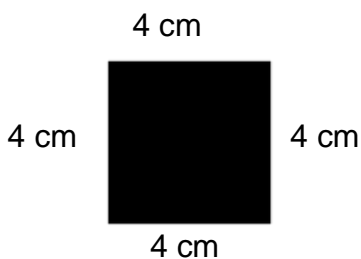
Nariši kvadrat, s stranico 3 cm.



Stranica je dolga: 3 cm

Obseg kvadrata:  $3\text{cm} + 3\text{cm} + 3\text{cm} + 3\text{cm} = 12\text{cm}$

Nariši kvadrat, s stranico 4 cm.



Stranica je dolga: \_\_\_\_\_ cm

Obseg kvadrata: \_\_\_\_\_ + \_\_\_\_\_ + \_\_\_\_\_ + \_\_\_\_\_ = \_\_\_\_\_

➤ Reši DZ 78/5