


## MATEMATIKA, četrtek – 2.4.

### Ponovitev URE

➤ **Koliko je ura:**

Najprej povej dopoldanski čas (primer: 4.30)

Potem popoldanski čas (primer: 16.30)



➤ **Reši delovni list - četrtek**

➤ **V zvezek zapiši in reši:**

**1) Napiši >, = ali <.**

2 h \_\_\_\_ 2 min

24 h \_\_\_\_ 24 min

15 min \_\_\_\_ 1 h

6 dni \_\_\_\_ 1 teden

1 dan \_\_\_\_ 12 h

1 h \_\_\_\_ 60 min

**2) Uredi po velikosti. Začni z najmanjšo!**

5 h, 7 h, 2 h \_\_\_\_\_

24 min, 36 min, 18 min \_\_\_\_\_

5 dni, 5 h, 5 min, 1 teden \_\_\_\_\_

1 teden, 5 dni, 2 tedna \_\_\_\_\_ -

➤ **Na internetu rešuj vaje:**

[https://www.digipuzzle.net/minigames/mathracer/mathracer\\_clocks\\_digital.htm?language=slovenian&linkback=../../education/clocks/index.htm](https://www.digipuzzle.net/minigames/mathracer/mathracer_clocks_digital.htm?language=slovenian&linkback=../../education/clocks/index.htm)

[https://www.digipuzzle.net/digipuzzle/kids/puzzles/linkpuzzle\\_analogue\\_digital\\_clocks.htm?language=slovenian&linkback=../../education/clocks/index.htm](https://www.digipuzzle.net/digipuzzle/kids/puzzles/linkpuzzle_analogue_digital_clocks.htm?language=slovenian&linkback=../../education/clocks/index.htm)

**Zapiši koliko je ura dopoldne in popoldne!**










**Vriši uro!**



**4.30**



**15.45**



**18.15**



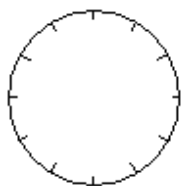
**7.45**



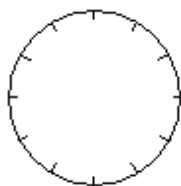
**9.15**



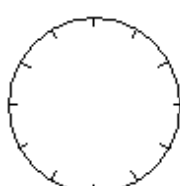
**12.15**



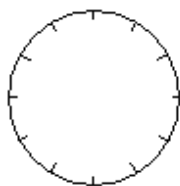
**7.15**



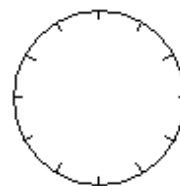
**20.15**



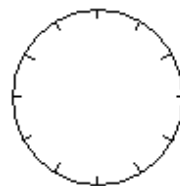
**13.30**



**21.00**



**16.45**



**17.00**